

Name ANSWER KEY

Date _____

Mean, Median, Mode, Range Practice**Directions:** Find the mean, median, mode, and range for each set of numbers below.

1. 12, 15, 12, 97, 46, 88

Mean: 45
Median: 30.5
Mode: 12
Range: 85

2. 33, 76, 37, 92, 92, 88

Mean: 69.7
Median: 82
Mode: 92
Range: 59

3. 4, 12, 4, 77, 4, 4

Mean: 17.5
Median: 4
Mode: 4
Range: 73

4. 102, 11, 46, 11

Mean: 42.5
Median: 28.5
Mode: 11
Range: 91

5. 65, 65, 21, 21, 65, 22

Mean: 43.2
Median: 43.5
Mode: 65
Range: 44

6. 44, 85, 73, 34, 34, 34

Mean: 50.7
Median: 39
Mode: 34
Range: 51

7. 22, 22, 26

Mean: 23.3
Median: 22
Mode: 22
Range: 4

8. 12, 15, 89, 97, 46, 88

Mean: 57.8
Median: 67
Mode: NONE
Range: 85

9. 33, 45, 61, 61, 43, 14

Mean: 42.8
Median: 44
Mode: 61
Range: 47

10. 32, 32, 32, 37, 39, 48

Mean: 36.7
Median: 34.5
Mode: 32
Range: 16

11. 15, 18, 16, 18, 19, 22

Mean: 18
Median: 18
Mode: 18
Range: 7

12. 23, 24, 29, 14, 16, 64

Mean: 28.3
Median: 23.5
Mode: NONE
Range: 50

Name ANSWER KEY

Date _____

Mean, Median, Mode, Range Practice

Directions: Find the mean, median, mode, and range for each set of numbers below.

1. 80, 59, 77, 54, 13, 59

Mean: 57
Median: 59
Mode: 59
Range: 67

2. 85, 67, 67, 86, 85

Mean: 78
Median: 85
Mode: 67, 85
Range: 19

3. 60, 60, 61, 63

Mean: 61
Median: 60
Mode: 60
Range: 3

4. 233, 7, 7, 7

Mean: 63.5
Median: 7
Mode: 7
Range: 226

5. 77, 65, 43, 43, 64, 9

Mean: 50.2
Median: 53.5
Mode: 43
Range: 68

6. 43, 90, 90, 55, 55, 90

Mean: 70.5
Median: 72.5
Mode: 90
Range: 47

7. 11, 45, 47, 45, 66, 75

Mean: 48.2
Median: 46
Mode: 45
Range: 64

8. 8, 4, 8, 4, 4, 4

Mean: 5.3
Median: 4
Mode: 4
Range: 4

9. 23, 65, 56, 56, 56, 56

Mean: 52
Median: 56
Mode: 56
Range: 42

10. 86, 56, 86, 54, 107

Mean: 77.8
Median: 86
Mode: 86
Range: 53

11. 1023, 1033, 1023

Mean: 1026.3
Median: 1023
Mode: 1023
Range: 10





12. 11, 11, 15, 14

Mean: 12.75
Median: 12.5
Mode: 11
Range: 4

Name ANSWER KEY

Date _____

Mean, Median, Mode, Range Practice

The number of clocks on the shelves at Clocks R US.	
Shelf 1	
Shelf 2	
Shelf 3	
Shelf 4	

1. What is the mean number of clocks on each shelf at Clocks R Us?

4.25

2. What is the mode number of clocks on each shelf at Clocks R Us?

5

3. What is the range between the number of clocks on shelf 4 and the number of clocks on shelf 2?

1

4. What is the median number of clocks on each shelf at Clocks R Us?

4.5