

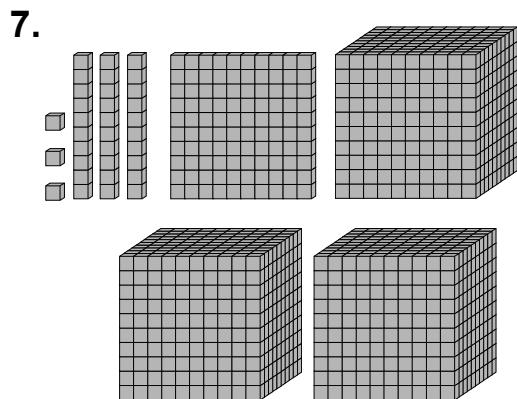
Name _____ Date _____

Place Value Practice

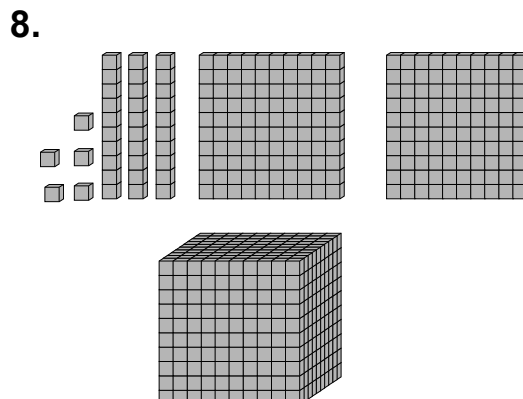
Directions: Write the place-value position for the following digits in 970,391,800,524.

1. 2 2. 4 3. 7 4. 9 5. 3 6. 1

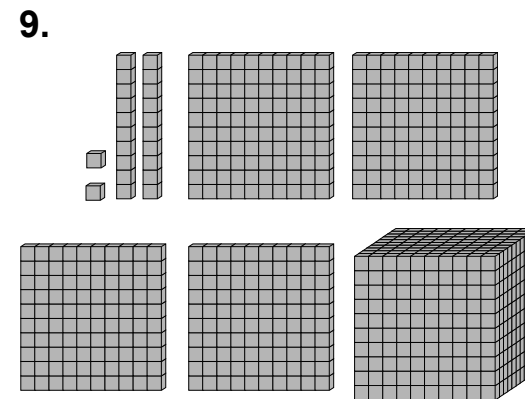
Directions: Write the number of blocks in each set.



_____ blocks



_____ blocks



_____ blocks

Directions: Solve the math problems.

10. $200 + 40 + 9 =$

11. $400 + 10 + 4 =$

12. $1000 + 300 + 90 + 7 =$

13. $900 + 20 + 3 =$

14. $300 + 50 + 1 =$

15. $700 + 80 + 6 =$

16. $800 + 9 =$

17. $100 + 40 + 2 =$